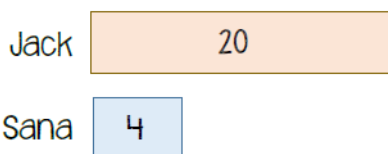


# BARVEMBER


Friday 30 November 2018

White  
Rose  
Maths

- 1** Jack has 20 stickers.  
Sana has 4 stickers.  
Jack gives Sana 6 stickers?  
How many more stickers does Jack now have than Sana?



- 2** Lucy has some bottles.  
There are 4 times as many clear bottles as green ones.  
Lucy has 70 bottles in total.  
How many more clear bottles than green bottles does Lucy have?

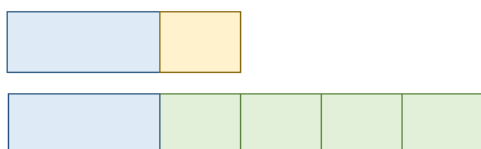


# BARVEMBER

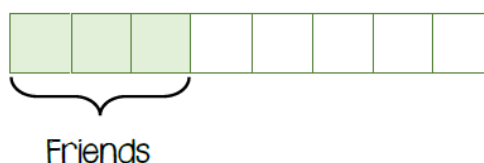
Friday 30 November 2018

White  
Rose  
Maths

- 3** Ken and Bobby have a total of £570  
Ken and Jill have a total of £1,200  
Jill has 4 times as much money as Bobby.  
How much money does Ken have?



- 4** Dexter baked some cakes.  
He gave  $\frac{3}{8}$  of his cakes to his friends.  
He gave  $\frac{2}{5}$  of the remaining cakes to his family.  
He had 24 cakes left.  
How many cakes did Dexter bake at the start?



# BARVEMBER

Friday 30 November 2018

White  
Rose  
Maths

## Challenge

Max has two number cards A and B.  
Max notices that  $\frac{2}{7}$  of A is equal to  $\frac{3}{5}$  of B.  
The sum of A and B is 1,240  
What is the difference between A and B?

